

Student Activity



Name: _____

Riddle Me Differences

Find the differences. Match the letter of each difference to the numbers at the bottom. Print the letter above the number.

$$\begin{array}{r} \boxed{a} \quad 25 \\ - \quad 5 \\ \hline \end{array}$$

$$\begin{array}{r} \boxed{b} \quad 17 \\ - \quad 0 \\ \hline \end{array}$$

$$\begin{array}{r} \boxed{c} \quad 95 \\ - \quad 40 \\ \hline \end{array}$$

$$\begin{array}{r} \boxed{d} \quad 31 \\ - \quad 28 \\ \hline \end{array}$$

$$\begin{array}{r} \boxed{e} \quad 44 \\ - \quad 9 \\ \hline \end{array}$$

$$\begin{array}{r} \boxed{g} \quad 88 \\ - \quad 33 \\ \hline \end{array}$$

$$\begin{array}{r} \boxed{h} \quad 93 \\ - \quad 27 \\ \hline \end{array}$$

$$\begin{array}{r} \boxed{l} \quad 80 \\ - \quad 10 \\ \hline \end{array}$$

$$\begin{array}{r} \boxed{m} \quad 37 \\ - \quad 14 \\ \hline \end{array}$$

$$\begin{array}{r} \boxed{n} \quad 34 \\ - \quad 28 \\ \hline \end{array}$$

$$\begin{array}{r} \boxed{o} \quad 32 \\ - \quad 14 \\ \hline \end{array}$$

$$\begin{array}{r} \boxed{p} \quad 12 \\ - \quad 12 \\ \hline \end{array}$$

$$\begin{array}{r} \boxed{s} \quad 45 \\ - \quad 15 \\ \hline \end{array}$$

$$\begin{array}{r} \boxed{t} \quad 71 \\ - \quad 24 \\ \hline \end{array}$$

$$\begin{array}{r} \boxed{w} \quad 62 \\ - \quad 13 \\ \hline \end{array}$$

$$\begin{array}{r} \boxed{y} \quad 30 \\ - \quad 29 \\ \hline \end{array}$$

Riddles:

a. Why are fish poor hockey players?

47	66	35	1

49	18	6	47

55	18

55	70	18	30	35

47	18

20

6	35	47

b. What did the spider do with the computer?

66	35

23	20	3	35

20

49	35	17

0	20	55	35

Name : _____

Score : _____

Teacher : _____

Date : _____

$$\begin{array}{r} 48 \\ 72 \\ + 78 \\ \hline \end{array}$$

$$\begin{array}{r} 93 \\ 85 \\ + 24 \\ \hline \end{array}$$

$$\begin{array}{r} 76 \\ 48 \\ + 38 \\ \hline \end{array}$$

$$\begin{array}{r} 76 \\ 39 \\ + 65 \\ \hline \end{array}$$

$$\begin{array}{r} 87 \\ 84 \\ + 95 \\ \hline \end{array}$$

$$\begin{array}{r} 70 \\ 15 \\ + 97 \\ \hline \end{array}$$

$$\begin{array}{r} 58 \\ 65 \\ + 62 \\ \hline \end{array}$$

$$\begin{array}{r} 11 \\ 45 \\ + 23 \\ \hline \end{array}$$

$$\begin{array}{r} 10 \\ 46 \\ + 70 \\ \hline \end{array}$$

$$\begin{array}{r} 55 \\ 33 \\ + 48 \\ \hline \end{array}$$

$$\begin{array}{r} 19 \\ 42 \\ + 57 \\ \hline \end{array}$$

$$\begin{array}{r} 56 \\ 31 \\ + 79 \\ \hline \end{array}$$

$$\begin{array}{r} 23 \\ 24 \\ + 62 \\ \hline \end{array}$$

$$\begin{array}{r} 41 \\ 54 \\ + 12 \\ \hline \end{array}$$

$$\begin{array}{r} 73 \\ 82 \\ + 31 \\ \hline \end{array}$$

$$\begin{array}{r} 26 \\ 69 \\ + 62 \\ \hline \end{array}$$



g. 45	b. 27	c. 38	d. 35	e. 28	f. 24
+ 7	+ 8	+ 6	+ 7	+ 9	+ 8
<hr/>	<hr/>	<hr/>	<hr/>	<hr/>	<hr/>

h. 15	h. 54	i. 25	j. 76	k. 57	l. 39
+ 7	+ 9	+ 7	+ 8	+ 3	+ 6
<hr/>	<hr/>	<hr/>	<hr/>	<hr/>	<hr/>

m. 27	n. 19	o. 17	p. 32	q. 29	r. 31	s. 38
+ 15	+ 32	+ 29	+ 18	+ 15	+ 19	+ 45
<hr/>	<hr/>	<hr/>	<hr/>	<hr/>	<hr/>	<hr/>

t. 49	u. 56	v. 16	w. 39	x. 18	y. 74	z. 27
+ 12	+ 16	+ 18	+ 55	+ 28	+ 16	+ 38
<hr/>	<hr/>	<hr/>	<hr/>	<hr/>	<hr/>	<hr/>

aa. 68	bb. 17	cc. 15	dd. 26	ee. 15	ff. 17	gg. 15
+ 24	+ 48	+ 16	+ 26	+ 17	+ 45	+ 68
<hr/>	<hr/>	<hr/>	<hr/>	<hr/>	<hr/>	<hr/>

hh. 35	ii. 17	jj. 55	kk. 38	ll. 35	mm. 18	nn. 25
+ 16	+ 58	+ 35	+ 13	+ 19	+ 23	+ 19
<hr/>	<hr/>	<hr/>	<hr/>	<hr/>	<hr/>	<hr/>

oo. 36	pp. 13	qq. 29	rr. 33	ss. 27	tt. 21	uu. 19
+ 35	+ 28	+ 19	+ 47	+ 15	+ 29	+ 19
<hr/>	<hr/>	<hr/>	<hr/>	<hr/>	<hr/>	<hr/>

Graphs



1 Mrs. Foster, the Year 2 teacher, gave these stars to her class.

☆	☆ ☆☆☆	☆☆☆ ☆☆☆	☆☆☆ ☆☆☆ ☆☆☆	☆☆		
Monday	Tuesday	Wednesday	Thursday	Friday	Saturday	Sunday

How many stars did she give on:

- a Monday?
- b Tuesday?
- c Sunday?
- d Thursday?
- e Friday?
- f Saturday?
- g Why were there no stars on Saturday and Sunday?
.....
- h How many stars were given altogether?
- i On what day were 6 stars given to the class?

2



Draw a graph of the pets brought to the pet show. Colour a square for each pet.

How many people had:


- a dogs?
- b rabbits?

This is called a graph.



Grand Pet Show

- rabbits
- dogs
- cats
- birds



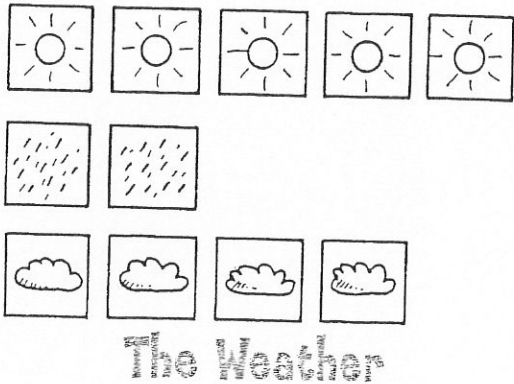

Comparing groups



1 We won these prizes at the show.

- a How many bats did we win?
- b How many balls did we win?
- c How many bears did we win?
- d Which prize did we win most often?
- e How many prizes did we win altogether?

Prizes won

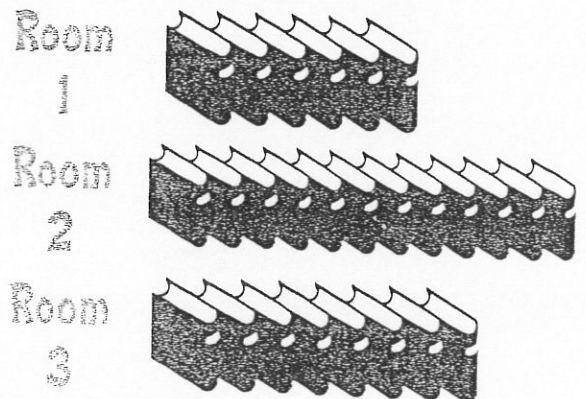


2 Greg drew a picture for each sunny, rainy or cloudy day.

- a How many days were sunny?
- b How many days were rainy?
- c How many days were cloudy?
- d How many days did he describe altogether?
- e What kind of weather happened most often?

3 These books were inside each room.

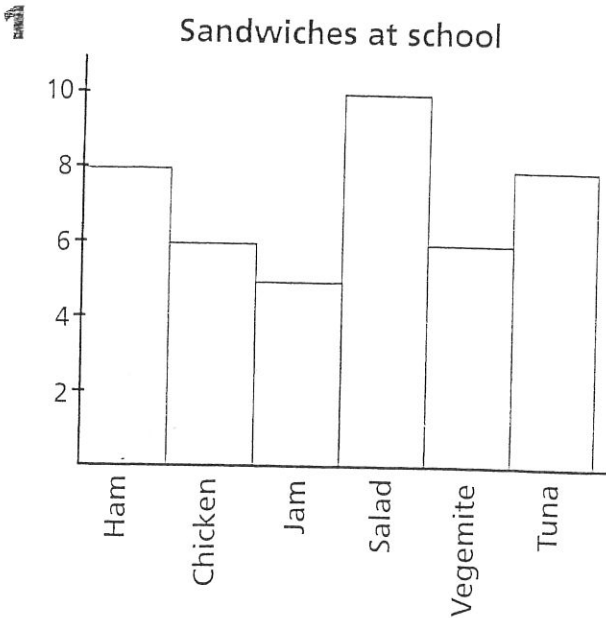
- a Which room had most books?
- b Which room had least books?
- c How many books were in room 3?
- d How many more books were in room 2 than in room 1?
- e How many books altogether?



Comparing



Look at the graphs. Answer the questions YES or NO.



Compare the information.

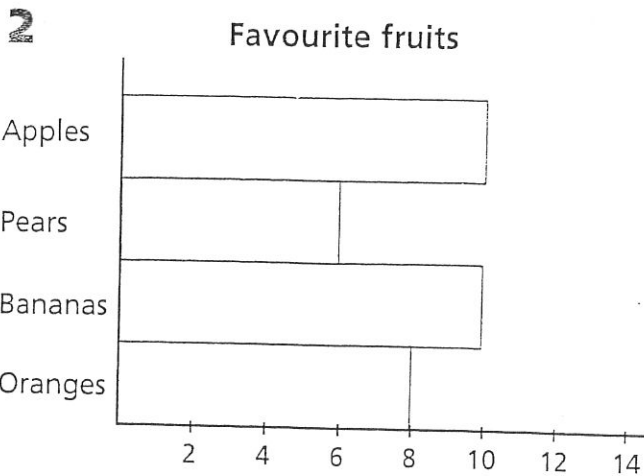
Yes No

- Are there as many ham as there are vegemite?
- Are there as many tuna as there are ham?
- Which other two have the same number?

<input type="checkbox"/>	<input type="checkbox"/>
--------------------------	--------------------------

<input type="checkbox"/>	<input type="checkbox"/>
--------------------------	--------------------------

..... and



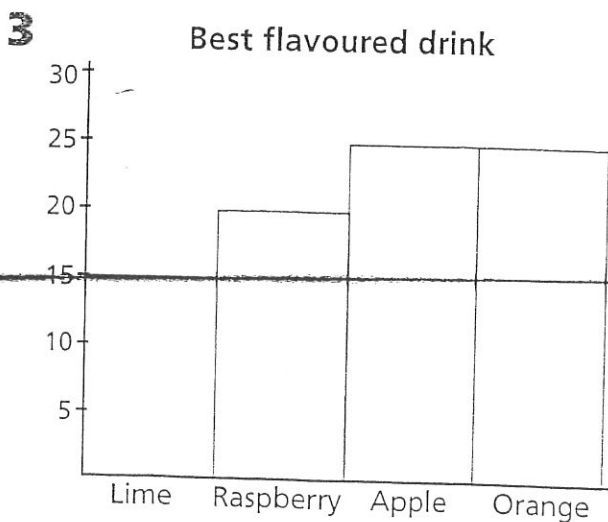
Yes No

- Pears are the least popular.
- Apples and bananas are equally popular.
- Oranges are less popular than apples.

<input type="checkbox"/>	<input type="checkbox"/>
--------------------------	--------------------------

<input type="checkbox"/>	<input type="checkbox"/>
--------------------------	--------------------------

<input type="checkbox"/>	<input type="checkbox"/>
--------------------------	--------------------------



Yes No

- There were two drinks that were equally popular.
- Lime is less popular than apple.
- Raspberry was more popular than orange.

<input type="checkbox"/>	<input type="checkbox"/>
--------------------------	--------------------------

<input type="checkbox"/>	<input type="checkbox"/>
--------------------------	--------------------------

<input type="checkbox"/>	<input type="checkbox"/>
--------------------------	--------------------------